

**SRMJEEE 2018**

**Q1 :** A star is very far from earth. If light takes 10 years from it to reach the earth, calculate the distance between star and earth.

- A**  $9.46 \times 10^{16}\text{m}$
- B**  $9.46 \times 10^{-16}\text{m}$
- C**  $9.46 \times 10^{17}\text{m}$
- D**  $9.46 \times 10^{-17}\text{m}$

Correct Ans : **A**

**Q2 :** The length of a body is measured as 3.51 m. If the accuracy is 0.01 m, then the percentage error in the measurement is \_\_\_\_\_

- A** 351%
- B** 1%
- C** 0.28%
- D** 0.03%

Correct Ans : **C**

**Q3 :** If a car accelerates from 20 m/s to 40 m/s in 10 s and its forward thrust is equal to 3 kN, what is the mass of car?

- A** 1500 tones.
- B** 150 tones.
- C** 15 tones.
- D** 1.5 tones.

Correct Ans : **D**

**Q4 :** Which one of following is a characteristic of force? It

- A** can make a stationary object to start move.
- B** cannot make a moving object to increase speed.
- C** can make a moving object to decrease speed.
- D** can change direction of an object.

Correct Ans : **B**

**Q5 :** Angular momentum is

- A** A scalar
- B** A polar vector
- C** A scalar as well as vector
- D** An axial vector

Correct Ans : **D**

**Q6 :** A spring of force constant K is cut into two pieces such that one piece is double the length of the other. Then the long piece will have a force constant of

**SRMJEEE 2018**

- A** 2/3k
- B** 3/2k
- C** 3k
- D** 6k

Correct Ans : **B**

**Q7** : The change in the gravitational potential energy when a body of mass  $m$  is raised to a height  $nR$  above the surface of the earth is (here  $R$  is the radius of the earth)

- A**  $\left[\frac{n}{n+1}\right]mgR$
- B**  $\left[\frac{n}{n-1}\right]mgR$
- C**  $nmgR$
- D**  $\frac{mgR}{n}$

Correct Ans : **A**

**Q8** : The time period of a simple pendulum on a freely moving artificial satellite is

- A** Zero
- B** 2 sec
- C** 3 sec
- D** Infinite

Correct Ans : **D**

**Q9** : \_\_\_\_\_ possess maximum value for rigidity modulus.

- A** iron
- B** copper
- C** steel
- D** tungsten

Correct Ans : **D**

**Q10** The restoring force of a system of mass executing SHM is 4N. If its displacement is 4 cm then : the force constant is

- A** 1000 N/m
- B** 10 N/m
- C** 100 N/m
- D** 20 N/m

Correct Ans : **C**

SRMJEE 2018

**Q11** The distance between the nearest node and antinode in a stationary wave is :

- A  $l$
- B  $\lambda/2$
- C  $\lambda/4$
- D  $2l$

Correct Ans : **C**

**Q12** A tube closed at one end containing air is excited. It produces the fundamental note of frequency 512 Hz. If the same tube is open at both the ends, the fundamental frequency that can be produced is

- A 1024 Hz
- B 512 Hz
- C 256 Hz
- D 128 Hz

Correct Ans : **A**

**Q13** The specific heat of a gas in an isothermal process is :

- A zero
- B infinite
- C constant
- D negative

Correct Ans : **B**

**Q14** Which of the following is adiabatic gas equation? :

- A  $PV = \text{Const}$
- B  $PV^\gamma = \text{Const}$
- C  $PV^{\gamma-1} = \text{Const}$
- D  $P \propto 1/V$

Correct Ans : **B**

**Q15** The volume of  $1\text{m}^3$  of gas is doubled at atmospheric pressure. The work done at constant pressure will be

- A zero
- B  $10^5 \text{ cal}$
- C  $10^5 \text{ J}$
- D  $10^5 \text{ erg}$

Correct Ans : **C**

**SRMJEE 2018**

**Q16** If the coefficient of cubical expansion is 'x' times of the coefficient of superficial expansion, then  
: value of 'x' is

- A** 1/2
- B** 1
- C** 1.5
- D** 4

Correct Ans : **C**

**Q17** A man is looking his magnified image in a mirror placed in front of him. The kind of mirror he is  
: using is \_\_\_\_\_

- A** Plane
- B** Convex
- C** Concave
- D** Reflection

Correct Ans : **C**

**Q18** A nicol prism is based on the principle of \_\_\_\_\_  
:

- A** Refraction
- B** Diffraction
- C** Reflection
- D** Double refraction

Correct Ans : **B**

**Q19** In Newton's rings experiment the diameter of certain order of dark ring is measured to be  
: double that of second ring. What is the order of the ring.

- A** 2
- B** 4
- C** 6
- D** 8

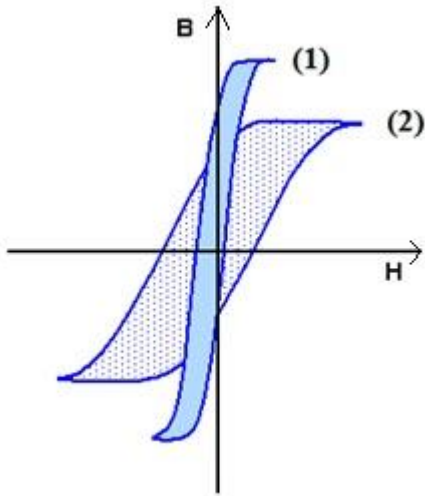
Correct Ans : **D**

**Q20** Parallel rays of light entering a convex lens always converge at \_\_\_\_\_  
:

- A** Centre of curvature
- B** The principle focus
- C** Optical centre
- D** Focal plane

Correct Ans : **B**

**Q21** The B-H curves for two ferromagnetic materials are shown in figure.  
:



These Hysteresis loops are for

- A** (1) soft iron and (2) steel
- B** (1) steel and (2) soft iron
- C** (1) diamagnetic and (2) paramagnetic
- D** (1) paramagnetic and (2) ferromagnetic

Correct Ans : **A**

**Q22** In an series LCR circuit the phase difference between voltage across R and C is  
:

- A** 0
- B**  $\frac{\pi}{2}$
- C**  $\pi$
- D**  $\frac{3\pi}{2}$

Correct Ans : **B**

**Q23** Eight dipoles with charges of magnitudes e are placed in side a cube. The total electric flux  
: coming out of the cube will be

- A**  $\frac{8e}{\epsilon_0}$
- B**  $\frac{16e}{\epsilon_0}$
- C**  $\frac{e}{\epsilon_0}$
- D** Zero

**SRMJEEE 2018**

Correct Ans : **D**

**Q24** The frequency of the charged particle circular at right angles to a uniform magnetic field does  
: not depend upon the

- A** speed of the particle
- B** mass of the particle
- C** charge of the particle
- D** magnetic field

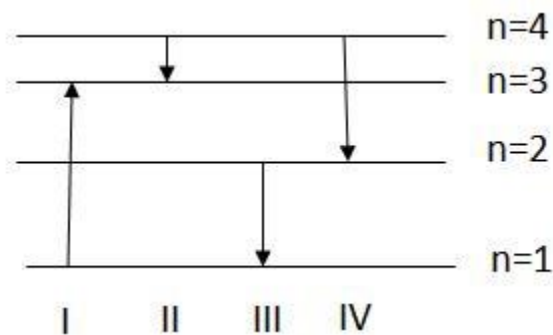
Correct Ans : **A**

**Q25** In the JJ Thomson method for the determination of  $e/m$  what is the angle between the  
: magnetic & electric fields to which the electrons are subjected?

- A**  $0^\circ$
- B**  $45^\circ$
- C**  $90^\circ$
- D**  $180^\circ$

Correct Ans : **C**

**Q26** The diagram shows the energy levels for an electron in a certain atom. Which transition shown  
: represents the emission of a photon with the most energy ?



- A** I
- B** II
- C** III
- D** IV

Correct Ans : **C**

**Q27** Rutherford's  $\alpha$  -particles scattering experiment showed that

- : (i) electrons have negative charge
- (ii) the mass and positive charge of the atom is concentrated in the nucleus
- (iii) neutron exists in the nucleus
- (iv) most of the space in atom is empty which of the above statements are correct?

- A** (i) and (iii)
- B** (ii) and (iv)
- C** (i) and (iv)

**D** (iii) and (iv)

Correct Ans : **B**

**Q28** Sun gives light at the rate of  $1400 \text{ Wm}^{-2}$  of the area perpendicular to the direction of the light.  
:

Assume  $\lambda$  (sunlight) =  $6000 \text{ \AA}$ . Calculate the number of protons/sec arriving at  $1 \text{ m}^2$  area at that part of the earth

**A**  $1.22 \times 10^{23}$

**B**  $4.22 \times 10^{21}$

**C**  $2.00 \times 10^{21}$

**D**  $7.83 \times 10^{23}$

Correct Ans : **B**

**Q29** In a Bainbridge mass spectrograph singly ionized atoms of a Neon-20 pass into the deflection chamber with the velocity of  $10^5 \text{ m/sec}$ . If they are deflected by a magnetic field of flux density  $0.08 \text{ tesla}$ , then the path radius of Neon-20 ion is \_\_\_\_\_

**A**  $0.300 \text{ m}$

**B**  $0.259 \text{ m}$

**C**  $0.459 \text{ m}$

**D**  $0.639 \text{ m}$

Correct Ans : **B**

**Q30** If an electron and a proton have the same de Broglie wavelength, then the kinetic energy of the electron is \_\_\_\_\_

**A** zero

**B** less than that of proton

**C** more than that of the proton

**D** equal to that of a proton

Correct Ans : **C**

**Q31** The transition in  $\text{He}^+$  ion that will give rise to a spectral line having the same wavelength as that of some spectral line in hydrogen atom is \_\_\_\_\_

**A**  $n = 3$  to  $n = 1$

**B**  $n = 3$  to  $n = 2$

**C**  $n = 4$  to  $n = 2$

**D**  $n = 4$  to  $n = 3$

Correct Ans : **C**

**Q32** Which of the following elementary particle is a lepton?

:

**A** Photon

SRMJEEE 2018

- B  $\mu$ -meson
- C  $\pi$ -meson
- D Proton

Correct Ans : **B**

**Q33** The maximum efficiency of a half wave rectifier is :

- A 40.6%
- B 81.2%
- C 50%
- D 25%

Correct Ans : **A**

**Q34** A feedback circuit usually employs ..... network :

- A Resistive
- B Capacitive
- C Inductive
- D both Capacitive and Inductive

Correct Ans : **A**

**Q35** In an amplifier with negative feedback, the bandwidth is :

- A Increased by a factor of  $\beta$
- B Decreased by a factor of  $\beta$
- C Increased by a factor of  $(1+A\beta)$
- D Not affected at all by the feedback where A = gain of the basic amplifier and  $\beta$  = feedback factor

Correct Ans : **C**

**Q36** \_\_\_\_\_ have a definite shape and a definite volume :

- A solids
- B liquids
- C gasses
- D plasmas

Correct Ans : **A**

**Q37** What are the states of Matter? :

- A Solids, Liquids and Gasses
- B Gasses and Plasma



SRMJEEE 2018

C Plasma and Bose Einstein condensates

D All Options

Correct Ans : D

**Q38** By what factors does the average velocity of a gaseous molecules increase when the temperature(in kelvin)is doubled?

A 1.4

B 2.0

C 2.8

D 4.0

Correct Ans : A

**Q39** The atomic radius is equal to

:

A One half the distance between the two nuclei in a molecule

B Two half the distance between the five nuclei in a molecule

C Four half the distance between the three nuclei in a molecule

D Three half the distance between the one nuclei in a molecule

Correct Ans : A

**Q40** Which of the following sets of ion represents a collection of isoelectronic species?

:

A  $N^{3-}$ ,  $O^{2-}$ ,  $F^-$ ,  $S^{2-}$

B  $Ba^{2+}$ ,  $Sr^{2+}$ ,  $K^{2+}$ ,  $Ca^{2+}$

C  $K^+$ ,  $Cl^-$ ,  $Ca^{2+}$ ,  $Sc^{3+}$

D  $Li^+$ ,  $Na^+$ ,  $Mg^{2+}$ ,  $Ca^{2+}$

Correct Ans : C

**Q41** Among the following elements (whose electronic configurations are given below) the one having highest ionization energy is

A  $[Ar] 3d^{10} 4S^2 4P^2$

B  $[Ne] 3S^2 3P^1$

C  $[Ne] 3S^2 3P^2$

D  $[Ne] 3S^2 3P^3$

Correct Ans : D

**Q42** Dalton's atomic theory successfully explained by \_\_\_\_\_?

- :
- (i) Law of conservation of mass
  - (ii) Law of constant composition
  - (iii) Law of radioactivity
  - (iv) Law of multiple proportion

A (i), (ii) and (iii)

B (i), (iii) and (iv)

SRMJEE 2018

C (ii), (iii) and (iv)

D (i), (ii) and (iv)

Correct Ans : D

**Q43** Among the following series of transition metal ions, the one where all metal ions have same 3d electronic configuration is:

A  $Ti^{2+}$ ,  $V^{3+}$ ,  $Cr^{4+}$ ,  $Mn^{5+}$

B  $Ti^{3+}$ ,  $V^{2+}$ ,  $Cr^{3+}$ ,  $Mn^{4+}$

C  $Ti^{+}$ ,  $V^{4+}$ ,  $Cr^{6+}$ ,  $Mn^{7+}$

D  $Ti^{4+}$ ,  $V^{3+}$ ,  $Cr^{2+}$ ,  $Mn^{3+}$

Correct Ans : A

**Q44** The speed of the electron in 3rd orbit is \_\_\_\_\_ if the speed of electron in Bohr first orbit of hydrogen atom be x.

A  $x/9$

B  $x/3$

C  $3x$

D  $9x$

Correct Ans : B

**Q45** Spin magnetic moment of cobalt of the compound  $Hg[Co(SCN)_4]$  is \_\_\_\_ (Provided:  $Co^{2+}$ )

:

A  $\sqrt{3}$

B  $\sqrt{8}$

C  $\sqrt{15}$

D  $\sqrt{24}$

Correct Ans : C

**Q46** The correct order of increase in boiling points

:

A  $CH_4 > SiH_4 > GeH_4 > SnH_4$

B  $GeH_4 > SnH_4 > SiH_4 > CH_4$

C  $SnH_4 > GeH_4 > SiH_4 > CH_4$

D  $SiH_4 > GeH_4 > CH_4 > SnH_4$

Correct Ans : A

**Q47** Arrange below molecules according to their increasing order of dipole moments

:

A  $CCl_4 < CHCl_3 < CH_2Cl_2 < CH_3Cl$

B  $CHCl_3 < CCl_4 < CH_2Cl_2 < CH_3Cl$

SRMJEEE 2018

C  $\text{CCl}_4 < \text{CH}_3\text{Cl} < \text{CH}_2\text{Cl}_2 < \text{CHCl}_3$

D  $\text{CH}_2\text{Cl}_2 < \text{CCl}_4 < \text{CHCl}_3 < \text{CH}_3\text{Cl}$

Correct Ans : **A**

**Q48** The outer orbitals of C in  $\text{C}_2\text{H}_4$  molecule can be considered to be hybridized to give 3 equivalent  $sp^2$  orbitals. The total number of  $\sigma$  and  $\pi$  bonds in  $\text{C}_2\text{H}_4$  molecule is

A 1, 2

B 3, 2

C 4, 1

D 5, 1

Correct Ans : **D**

**Q49** During the melting of a slab of ice at 273K at atmospheric pressure:

:

A positive work is done by the ice-water system on the atmosphere and the internal energy of ice-water system decreases.

B positive work is done on the ice-water system by the atmosphere and the internal energy of the ice-water system increases

C only the internal energy of the ice-water system increases

D only the internal energy of ice-water system decreases.

Correct Ans : **B**

**Q50** The enthalpy of hydrogenation of cyclohexene is  $-119.5 \text{ kJ mol}^{-1}$ . If resonance energy of benzene is  $-150.4 \text{ kJ mol}^{-1}$ , its enthalpy of hydrogenation would be

A  $-208.1 \text{ kJ mol}^{-1}$

B  $-269.9 \text{ kJ mol}^{-1}$

C  $-358.5 \text{ kJ mol}^{-1}$

D  $-508.9 \text{ kJ mol}^{-1}$

Correct Ans : **A**

**Q51** The least random state of  $\text{H}_2\text{O}$  is

:

A Ice

B Liquid water

C Steam

D Randomness is same in all

Correct Ans : **A**

**Q52** The binary mixture in which partial miscibility increases on increasing temperature is

:

A Phenol-water

B Ether-water

C Triethyl amine-water

SRMJEEE 2018

D Nicotine-water

Correct Ans : **A**

**Q53** Calculate the mole fraction of water in a mixture containing 9.0 g water ( $M_m=18 \text{ gmol}^{-1}$ ), 120g acetic acid ( $M_m= 60 \text{ gmol}^{-1}$ ) and 115g ethanol ( $M_m= 46 \text{ gmol}^{-1}$ ).

**A** 1.0

**B** 0.15

**C** 1.5

**D** 0.10

Correct Ans : **D**

**Q54** Four species are listed below

- : I.  $\text{HCO}_3^-$   
II.  $\text{H}_3\text{O}^+$   
III.  $\text{HSO}_4^-$   
IV.  $\text{HSO}_3\text{F}$

Which one of the following is the correct sequence of the acid strength?

**A**  $\text{IV} < \text{II} < \text{III} < \text{I}$

**B**  $\text{II} < \text{III} < \text{I} < \text{IV}$

**C**  $\text{I} < \text{III} < \text{II} < \text{IV}$

**D**  $\text{III} < \text{I} < \text{IV} < \text{II}$

Correct Ans : **C**

**Q55** Using Lewis concept, determine the decreasing order of basic strengths of  $\text{ClO}_4^-$ ,  $\text{ClO}_3^-$  and  $\text{ClO}_2^-$

:

**A**  $\text{ClO}_3^- > \text{ClO}_2^- > \text{ClO}_4^-$

**B**  $\text{ClO}_4^- > \text{ClO}_3^- > \text{ClO}_2^-$

**C**  $\text{ClO}_2^- > \text{ClO}_3^- > \text{ClO}_4^-$

**D**  $\text{ClO}_4^- > \text{ClO}_2^- > \text{ClO}_3^-$

Correct Ans : **C**

**Q56** Which is need for electroless plating?

:

**A** Reducing agent

**B** Direct current

**C** Pulse current

**D** Battery

Correct Ans : **A**

**Q57** The oxidation of sodium sulphite by air is retarded by

:

**A**  $\text{MnO}_2$

**B**  $\text{H}_2\text{S}$

SRMJEE 2018

C Alcohol

D As<sub>2</sub>O<sub>3</sub>

Correct Ans : C

**Q58** Soap suds is a:

:

A foam

B sol

C gel

D aerosol

Correct Ans : A

**Q59** A mixture of camphor and benzoic acid can be separated by which of the following technique?

:

A Chemical methods

B Sublimation

C Fractional distillation

D Extraction with a solvent.

Correct Ans : A

**Q60** Sodium extract of an organic compound gives blood red colour with FeCl<sub>3</sub>. It contains

:

A S and Cl

B N and S

C N

D S

Correct Ans : B

**Q61** IUPAC name of (CH<sub>3</sub>)<sub>2</sub>CH-CH=CH-CH<sub>3</sub> is,

:

A 4-methyl-2-pentene

B 3-isopropyl-2-propene

C 2-methyl-3-pentene

D 1, 2-isopropyl-1-propene

Correct Ans : A

**Q62** Which of the following amino acid is achiral?

:

A Alanine

B Glycine

C Proline

D Phenylalanine

Correct Ans : **B**

**Q63** Which mechanism involves heterolytic fission?

:

- A**  $C_2H_4 + HBr \rightarrow C_2H_5Br$
- B**  $C_2H_6 + Br_2 \rightarrow C_2H_5Br + HBr$
- C**  $O_3 + O \rightarrow 2 O_2$
- D** none

Correct Ans : **A**

**Q64** Ozonolysis of an organic compound gives formaldehyde as one of the products. This confirms the presence of

- A** vinyl group
- B** Two ethylenic double bonds
- C** An acetylenic triple bond
- D** An isopropyl group

Correct Ans : **A**

**Q65** When phenol is treated with  $CHCl_3$  and  $NaOH$ , the product formed is

:

- A** Benzaldehyde
- B** Salicylaldehyde
- C** Salicylic acid
- D** Benzoic acid

Correct Ans : **B**

**Q66** Hydrolysis of diazonium salt produces

:

- A** benzene
- B** phenol
- C** aniline
- D** azobenzene

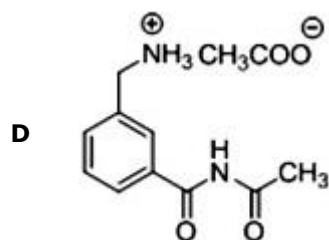
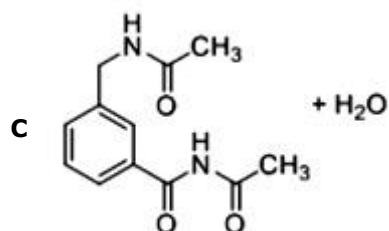
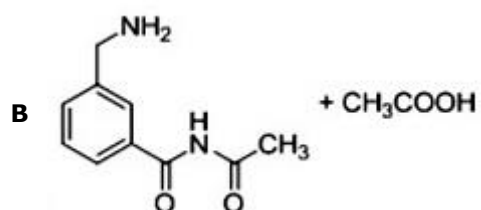
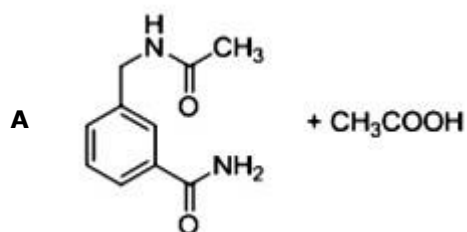
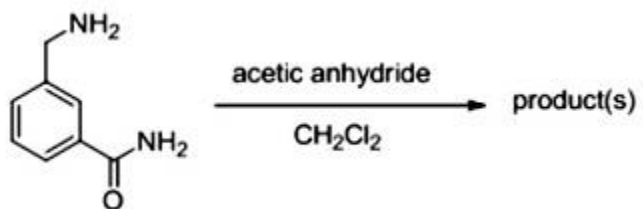
Correct Ans : **B**

**Q67** Aniline is a resonance hybrid of five structures and where do you find the maximum electron density in those structures?

- A** Ortho-position only
- B** Para-position only
- C** Ortho-and para-positions
- D** Ortho- and meta - positions

Correct Ans : **C**

**Q68** In the reaction shown below, the major product formed is :



Correct Ans : **A**

**Q69** Thermoplastic can be reused because of? :

- A** Intermediate intermolecular forces
- B** Heavily cross-linked polymer chains
- C** Weakest intermolecular forces
- D** High stability

Correct Ans : **A**

**Q70** What is the name of six membered cyclic structure of glucose?

:

- A** Anomer
- B** Pyranose
- C** Furan
- D** Proline

Correct Ans : **B**

**Q71** A function  $f$  from the set of natural numbers to integers defined

:

$$f(n) = \begin{cases} \frac{(n-1)}{2} & \text{if } n \text{ odd} \\ -\frac{n}{2} & \text{if } n \text{ even} \end{cases}$$

by \_\_\_\_\_ is :

- A** one-one but not onto
- B** onto but not one-one
- C** one-one and onto both
- D** neither one-one nor onto

Correct Ans : **C**

**Q72** A set  $A$  contains 10 elements, then the number of relations on  $A$  into  $A$  is

:

- A**  $2^{10}$
- B**  $10^2$
- C**  $2^{100}$
- D**  $2^{1000}$

Correct Ans : **C**

**Q73**  $\tan 7\theta - \tan 5\theta - \tan 2\theta =$

:

- A**  $\tan 7\theta \tan 5\theta \tan 2\theta$
- B**  $\tan 7\theta \cot 5\theta \cot 2\theta =$
- C**  $\cot 7\theta \tan 5\theta \tan 2\theta$
- D**  $\cot 2\theta + \cot 5\theta - \cot 7\theta =$

Correct Ans : **D**

**Q74** The number of solutions of  $\sin 2x + 4\cos x = 2 + \sin x$ , in  $[-\pi, 4\pi]$  is

:

- A** 6
- B** 4
- C** 3
- D** 5



Correct Ans : **B**

**Q75**

:

The order of the differential equation  $2x^2 \frac{d^2y}{dx^2} - 3 \frac{dy}{dx} + y = 0$  is

- A** 2
- B** 1
- C** 0
- D** not defined

Correct Ans : **A**

**Q76** The product of the real roots of the equation  $|2x + 3|^2 - 3|2x + 3| + 2 = 0$  is

:

- A** 5/4
- B** 5/2
- C** 5
- D** 2

Correct Ans : **C**

**Q77** if  $x^3 - 6x^2 + 12x + 19 = 0$  and  $\omega$  is a non-real cube root of 1, then  $x =$

:

- A** -1
- B**  $2 - 3\omega$
- C**  $2 - 3\omega^2$
- D** (a) or (b) or (c)

Correct Ans : **D**

**Q78**

:

If  $(4 \ 3 \ 2) \begin{pmatrix} 1 \\ -2 \\ x \end{pmatrix} = (6)$  then  $x$  is

- A** 4
- B** 3
- C** 2
- D** 1

Correct Ans : **A**

**Q79**

:

If  $ae^x + be^y = c$ ;  $pe^x + qe^y = d$  and  $\Delta_1 = \begin{vmatrix} a & b \\ p & q \end{vmatrix}$ ;  $\Delta_2 = \begin{vmatrix} c & b \\ d & q \end{vmatrix}$ ;  $\Delta_3 = \begin{vmatrix} a & c \\ p & d \end{vmatrix}$  the the value of  $(x, y)$  is

- A**  $\left( \frac{\Delta_2}{\Delta_1}, \frac{\Delta_3}{\Delta_1} \right)$

**B**  $\left(\log \frac{\Delta_2}{\Delta_1}, \log \frac{\Delta_3}{\Delta_1}\right)$

**C**  $\left(\log \frac{\Delta_1}{\Delta_3}, \log \frac{\Delta_1}{\Delta_2}\right)$

**D**  $\left(\log \frac{\Delta_1}{\Delta_2}, \log \frac{\Delta_1}{\Delta_3}\right)$

Correct Ans : **B**

**Q80**

:

$$\text{If } \Delta = \begin{vmatrix} 3 & 4 & 5 & x \\ 4 & 5 & 6 & y \\ 5 & 6 & 7 & z \\ x & y & z & 0 \end{vmatrix} = 0, \text{ then}$$

**A**  $x, y, z$  are in A.P

**B**  $x, y, z$  are in G.P

**C**  $x, y, z$  are in H.P

**D** none of these

Correct Ans : **A**

**Q81**

:

$$\text{If } \begin{vmatrix} 1 & x & x^2 \\ x & x^2 & 1 \\ x^2 & 1 & x \end{vmatrix} = 7 \text{ and } \Delta = \begin{vmatrix} x^3 - 1 & 0 & x - x^4 \\ 0 & x - x^3 & x^3 - 1 \\ x - x^4 & x^3 - 1 & 0 \end{vmatrix}, \text{ then}$$

**A**  $\Delta = -9$

**B**  $\Delta = 7$

**C**  $\Delta = 49$

**D**  $\Delta = 343$

Correct Ans : **C**

**Q82** The number of 4 digit numbers that can formed by using the digits 1,2,3,4,5,6,7,8 and 9 such that the least digit used is 4, when repetition of digits is allowed

**A** 617

**B** 671

**C** 716

**D** 761

Correct Ans : **B**

**Q83** In how many ways can 6 boys and 4 girls sit in a row?

:

**A** 10!

**B** 100

**C** 6!4!

**D** 5!4!

Correct Ans : **A**

**Q84**  
: If  $x = \frac{3at}{(a+t^3)}$ ,  $y = \frac{3at^2}{(1+t^3)}$ , then  $\frac{dy}{dx}$  at  $t = \frac{1}{2}$  is

**A**  $\frac{4}{3}$

**B**  $\frac{17}{12}$

**C**  $\frac{19}{15}$

**D**  $\frac{5}{4}$

Correct Ans : **B**

**Q85** Let  $f : \mathbb{R} \rightarrow \mathbb{R}$ ,  $g : \mathbb{R} \rightarrow \mathbb{R}$  be two given functions. Such that  $f$  is injective and  $g$  is surjective, then which of the following is injective?

**A**  $g \circ f$

**B**  $f \circ g$

**C**  $g \circ g$

**D**  $f \circ f$

Correct Ans : **D**

**Q86** Suppose the function  $f(x)-f(2x)$  has the derivative 5 at  $x=1$  and derivative 7 at  $x=2$ . The derivative of the function  $f(x)-f(4x)$  at  $x=1$  has the value equal to

**A** 19

**B** 9

**C** 17

**D** 14

Correct Ans : **A**

**Q87** If  $S = t^3 - 4t^2 + 100$  then the velocity when the acceleration is Zero is

**A**  $\frac{32}{3} m/sec$

**B**  $\frac{-16}{3} m/sec$

C  $\frac{16}{3} m/sec$

D  $-\frac{32}{3} m/sec$

Correct Ans : **B**

**Q88**  
: If  $\int f(x) dx = f(x)$ , then  $\int \{f(x)\}^2 dx$  is equal to

A  $\frac{1}{2}\{f(x)\}^2$

B  $\{f(x)\}^3$

C  $\frac{\{f(x)\}^3}{3}$

D  $\{f(x)\}^2$

Correct Ans : **A**

**Q89**  
: If  $I = \int_{\pi/6}^{\pi/3} \frac{dx}{1 + \sqrt{\cot x}}$ , Then I =

A  $\frac{\pi}{12}$

B  $\frac{\pi}{16}$

C  $\frac{\pi}{2}$

D  $\frac{\pi}{8}$

Correct Ans : **A**

**Q90** The area of the region b'dd by the line  $y=x-5$  and the x axis between the ordinates  $x=3$  and  $x=7$

A 10 sq.units

B 4 sq.units

C 2 sq.units

D 1 sq.units

Correct Ans : **B**

**Q91**  $\int \frac{\sin x}{\cos^2 x} dx$

- A**  $\log \cos x$
- B**  $\log \sec x$
- C**  $\sec x$
- D**  $\sin^2 x$

Correct Ans : **C**

**Q92** The equation of the tangent to the circle  $x^2 + y^2 = 25$  at (4,3) is

- A**  $4x - 3y = 25$
- B**  $4x + 3y = 25$
- C**  $4x + 3y = 16$
- D**  $4x + 3y = 9$

Correct Ans : **B**

**Q93**

:

the equation of the chord of contact of tangents from (2,1) to the hyperbola  $\frac{x^2}{16} - \frac{y^2}{9} = 1$  is

- A**  $9x - 8y - 72 = 0$
- B**  $9x + 8y + 72 = 0$
- C**  $8x - 9y - 72 = 0$
- D**  $8x + 9y + 72 = 0$

Correct Ans : **A**

**Q94** The locus of the centre of a circle which touches externally the circle  $x^2 + y^2 - 6x - 6y + 14 = 0$  and also touches the y-axis is given by the equation

- A**  $x^2 - 6x - 10y + 14 = 0$
- B**  $x^2 - 10x - 6y + 14 = 0$
- C**  $y^2 - 6x - 10y + 14 = 0$
- D**  $y^2 - 10x - 6y + 14 = 0$

Correct Ans : **D**

**Q95** The distance between the two lines represented by the equation  $9x^2 + 24xy + 16y^2 - 12x + 16y - 12 = 0$  is

- A**  $8/5$
- B**  $6/5$

**SRMJEEE 2018**

- C** 11/5  
**D** none of these  
 Correct Ans : **A**

**Q96** Let A(2, -3) and B(-2, 1) be vertices of a triangle ABC. If the centroid of this triangle moves on the line  $2x + 3y = 1$ , then the locus of the vertex C is the line

- A**  $2x + 3y = 9$   
**B**  $2x - 3y = 7$   
**C**  $3x + 2y = 5$   
**D**  $3x - 2y = 3$

Correct Ans : **A**

**Q97** If the sum of the slopes of the lines given by  $x^2 - 2cxy - 7y^2 = 0$  is four times product, then  $c =$

- A** 1  
**B** -1  
**C** 2  
**D** -2

Correct Ans : **C**

**Q98**

Let  $\vec{a} = 2\vec{i} - \vec{j} + \vec{k}$ ,  $\vec{b} = \vec{i} + 2\vec{j} - \vec{k}$  and  $\vec{c} = \vec{i} + \vec{j} + 2\vec{k}$  be three vectors. A vector in the

plane of b and c whose projection on a is  $\sqrt{\frac{2}{3}}$  will be

- A**  $2\vec{i} + 3\vec{j} - 3\vec{k}$   
**B**  $2\vec{i} + 3\vec{j} - \vec{k}$   
**C**  $-2\vec{i} - \vec{j} + 5\vec{k}$   
**D**  $2\vec{i} + \vec{j} + 5\vec{k}$

Correct Ans : **C**

**Q99** A tetrahedron has vertices at  $O(0,0,0)$ ,

$A(1,2,1)$ ,  $B(2,1,3)$  and  $C(-1,1,2)$  then the angle between the faces OAB and ABC will be

- A**  $\cos^{-1}\left[\frac{19}{35}\right]$   
**B**  $\cos^{-1}\left[\frac{17}{31}\right]$   
**C**  $30^\circ$   
**D**  $90^\circ$

SRMJEEE 2018

Correct Ans : **A**

**Q100** If A, B are two mutually exclusive events, then  
:

**A**  $P(A) + P(B) = 1$

**B**  $P(A) \leq P(\bar{B})$

**C**  $P(A)P(B) = P(A \cap B)$

**D**  $P(A) > P(B)$

Correct Ans : **B**

**Q101** If the median of  $x/5, x, x/4, x/2$  and  $x/3$  (where  $x > 0$ ) is 8, then the value of x would be  
:

**A** 24

**B** 32

**C** 8

**D** 16

Correct Ans : **A**

**Q102**

: If the number of terms in,  $\left(x + 1 + \frac{1}{x}\right)^n, n \in N$  is 301, then n is greater than

**A** 152

**B** 151

**C** 150

**D** 149

Correct Ans : **D**

**Q103** The sum of the 25<sup>th</sup> and 76<sup>th</sup> terms of an AP is 101; the sum of the first 100 terms of the AP is  
:

**A** 9999

**B** 4949

**C** 5050

**D** 10100

Correct Ans : **C**

**Q104** In a triangle the angle are in A.P and the lengths of the larger sides are 10 and 9 respectively  
: then the length of the third side can be

**A**  $5 + \sqrt{6}$

**B**  $\frac{7}{10}$

C  $5 \pm \sqrt{6}$

D  $\frac{10}{7}$

Correct Ans : C

**Q105**

:

$$\left( \frac{2x^3}{3} + \frac{3}{2x^2} \right)^{10}$$

The middle term in the expansion of  $\left( \frac{2x^3}{3} + \frac{3}{2x^2} \right)^{10}$  is

A 240

B 280

C 262

D 252

Correct Ans : D

**Q106** Application of bioinformatics include?

:

A proving a signaling pathway

B clinical trials

C drug design

D identification of lipid pathway

Correct Ans : C

**Q107** Nucleotide sequence submission system and mass submission system are submission tools of

: ?

A GenBank

B DDBJ

C EMBL

D UniProt

Correct Ans : B

**Q108** Hydrogen bonds between cytosine and guanine are cytosine and guanine

:

A 1

B 2

C 3

D 4

Correct Ans : C

**Q109** In forensic science one of the following technique is used

:

A RNA foot printing



**SRMJEEE 2018**

- B** RNA cloning
- C** In vitro fertilization
- D** DNA fingerprinting

Correct Ans : **D**

**Q110** \_\_\_\_\_ is a group of plants representing one or more ecospecies of common : evolutionary origin.

- A** Ecospecies
- B** Ecotype
- C** Comparium
- D** Cenospecies

Correct Ans : **D**

**Q111** Stamens epipetalous, alternate with the petals, usually not equal in length and filaments are : basifixed.in \_\_\_\_\_.

- A** Solanaceae
- B** Malvaceae
- C** Arecaceae
- D** Rubiaceae

Correct Ans : **A**

**Q112** \_\_\_\_\_ is composed of single layer of barrel shaped parenchymatous cells and forms a : complete ring around the stele.

- A** Endodermis
- B** Rhizodermis
- C** Epdermis
- D** Epiblema

Correct Ans : **A**

**Q113** According to which phylogenetic system, dicots are advanced with sympetalae conditions? :

- A** Bentham & Hooker's
- B** Engler & Prantl
- C** Hutchinson
- D** Takhtajan

Correct Ans : **B**

**Q114** The types of roots present in mustard plant is :

- A** Fibrous roots
- B** Adventitious roots
- C** Tap roots

**SRMJEEE 2018**

**D** Nodulated roots

Correct Ans : **C**

**Q115** Linkage prevents

:

**A** Homozygous condition

**B** Segregation of alleles

**C** Hybrid formation

**D** Heterozygous condition

Correct Ans : **B**

**Q116** Why are genetic disorders such as haemophilia and Duchenne muscular dystrophy more prevalent in males than females?

**A** Because they can only be passed on from father to son

**B** Because they are dominant genetic disorders

**C** Because they occur due to spontaneous mutations in the Y-chromosome

**D** Because they are X-linked recessive disorders

Correct Ans : **D**

**Q117** A nicked RNA molecule can be ligated by

:

**A** T4 RNA ligase

**B** DNA polymerase III

**C** T4 DNA ligase

**D** DNA polymerase I

Correct Ans : **C**

**Q118** Which of the following structures are present in core particle of nucleosome?

:

**A** Octamer of histone proteins

**B** 200 bp of DNA

**C** Non-histone proteins

**D** Linker DNA

Correct Ans : **A**

**Q119** High levels of ABA are synthesized in

:

**A** tissues undergoing cell division

**B** tissues undergoing cell elongation

**C** tissues undergoing stress

**D** tissues undergoing ripening

Correct Ans : **C**

**Q120** Minerals absorbed by root move to the leaf through  
:

- A** xylem
- B** phloem
- C** sieve tubes
- D** sieve elements

Correct Ans : **A**

**Q121** Which one increases in the absence of light?  
:

- A** uptake of minerals
- B** uptake of water
- C** elongation of internodes
- D** ascent of sap.

Correct Ans : **C**

**Q122** Photosystem II occurs in  
:

- A** stroma
- B** cytochrome
- C** grana
- D** mitochondrial surface

Correct Ans : **C**

**Q123** The hormone that is produced during chilling treatment  
:

- A** IAA
- B** ethylene
- C** gibberrelin
- D** vernalin

Correct Ans : **D**

**Q124** VAM is  
:

- A** endomycorrhiza
- B** ectomycorrhiza
- C** bioinsecticide
- D** bioherbicide

Correct Ans : **A**

**SRMJEE 2018**

**Q125** Most famous nitrogen fixing bacterium / biofertilizer is  
:

- A** Nitrobacter
- B** Nitrosomonas
- C** Nitrococcus
- D** Rhizobium

Correct Ans : **D**

**Q126** Which of the following is generally used for induced mutagenesis in crop plants?  
:

- A** X-rays
- B** UV (260 nm)
- C** gamma rays (from cobalt 60)
- D** alpha particles

Correct Ans : **C**

**Q127** In maize, hybrid vigour is exploited by  
:

- A** crossing of two inbred parental lines
- B** harvesting seeds from the most productive plants
- C** inducing mutations
- D** bombarding the seeds with DNA

Correct Ans : **A**

**Q128** Which type of ossicles is not observed in the middle ear of humans?  
:

- A** Malleus
- B** Incus
- C** Cochlea
- D** Stapes

Correct Ans : **C**

**Q129** Which of the following is not a facial bone?  
:

- A** Parietal
- B** Lachrymal
- C** Zygomatic
- D** Vomra

Correct Ans : **A**

**Q130** The inhibitory process of respiratory centre in brain that regulates the extent of inspiration is  
: known as

**SRMJEEE 2018**

- A** Pavlov reflex
- B** Spinal reflex
- C** Neuro - endocrine reflex
- D** Herring - Breuer reflex

Correct Ans : **D**

**Q131** The common passage for food and air is  
:

- A** Oesphagus
- B** Pharynx
- C** Trachea
- D** Glottis

Correct Ans : **B**

**Q132** Wharton's duct is part of \_\_\_\_\_ glands.  
:

- A** sublingual
- B** submaxillary
- C** parotid
- D** brunner's

Correct Ans : **B**

**Q133** The first observation that bacteria-like organism could found in normal air was by  
:

- A** Joseph Meister
- B** Anoton Leeuwenhoek
- C** Louis Pasteur
- D** Rober Koch

Correct Ans : **C**

**Q134** Which of the following scientist first showed mutually beneficial relationship between bacteria  
: and leguminous plants?

- A** Hellriegel and Wilfarth
- B** Nocard and Roux
- C** Winogradsky and Beijerinck
- D** Welch and Nuttall

Correct Ans : **C**

**Q135** Bacterial flagella is made up of  
:

- A** microtubules
- B** tubulin

**SRMJEEE 2018**

**C** flagellin

**D** spinin

Correct Ans : **C**

**Q136** The spleen is largely involved with the response to antigens which are in the  
:

**A** Tissues

**B** Blood

**C** Gut

**D** Lungs

Correct Ans : **B**

**Q137** Which among the following is nonrenewable source of energy?  
:

**A** Solar energy

**B** Biomass energy

**C** Hydro-power

**D** Geothermal energy

Correct Ans : **B**

**Q138** The formula for exponential population growth is  
:

**A**  $dt/dN=rN$

**B**  $dN/dt=rN$

**C**  $dN/rN=dt$

**D**  $rN/dN=dt$

Correct Ans : **B**

**Q139** Which of the following is NOT a type of endoscopy  
:

**A** Colonoscopy

**B** Laryngoscopy

**C** Cryoscopy

**D** Bronchoscopy

Correct Ans : **C**

**Q140** McDougall experiment with rats supported  
:

**A** Neo-Darwinism

**B** Neo-Lamarckism

**C** Hardy-weinberg equilibrium

**D** Founders effect

Correct Ans : **B**